

Key Stage 2

Based on the New 2016 SATs

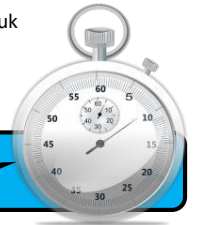


Easter Revision Booklet

Timed daily activities in
Arithmetic, Reasoning and
Grammar for 10 days



Name:	
Teacher's Name:	
School:	



Day 1

Arithmetic Questions

Don't forget to start your timer!

1

$40\% \text{ of } 1900 =$

Grid area for working out the answer.

1 mark

2

$3815 - 1786 =$

Grid area for working out the answer.

1 mark

3

$2,592 \div 6 =$

Grid area for working out the answer.

1 mark

Day 1

Arithmetic Questions

7

$$1\frac{1}{7} - \frac{4}{7} =$$

1 mark

8


$$650 - 24 \times 7 =$$

1 mark

9

$$201 - 198 =$$

1 mark



What do you call a rabbit
with fleas?
Bugs Bunny!

Day 1 **Arithmetic Questions**

10	$\begin{array}{r} 2465 \\ \times 18 \\ \hline \end{array}$	<input style="width: 40px; height: 20px;" type="text"/> 2 marks
Show your method	<input style="width: 150px; height: 40px;" type="text"/>	

Now, use your answers to mark your work and write your score in your booklet and on your scoresheet!

Don't worry, if you didn't get all of the questions right, your teacher will be able to help you once you get back to school. Record your score and time below and on your scoresheet for your teacher!

Total Score

11

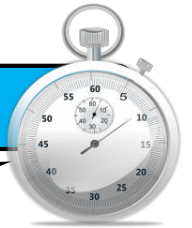


Well done!

You've completed your brain workout for today!

Time taken

min
sec



Day 2

Reasoning Questions

Don't forget to start your timer!

A school sells juice.

The pie chart compares the money the school took last year for three different flavours of juice.

The school took **£6,916** for apple juice. Sales of lemon and orange were **equal**.



■ lemon ■ orange ■ apple

1 How much money did the school take for orange juice?

Show your method		£	<div style="border: 2px solid blue; width: 40px; height: 40px; margin: 0 auto;"></div>
			2 marks

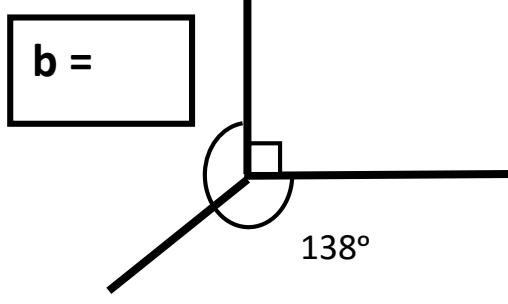
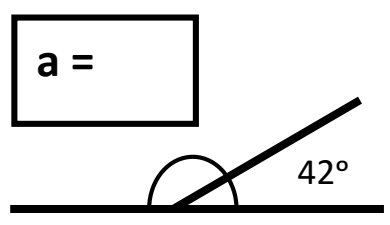


Day 2

Reasoning Questions

2

Calculate the angles a and b

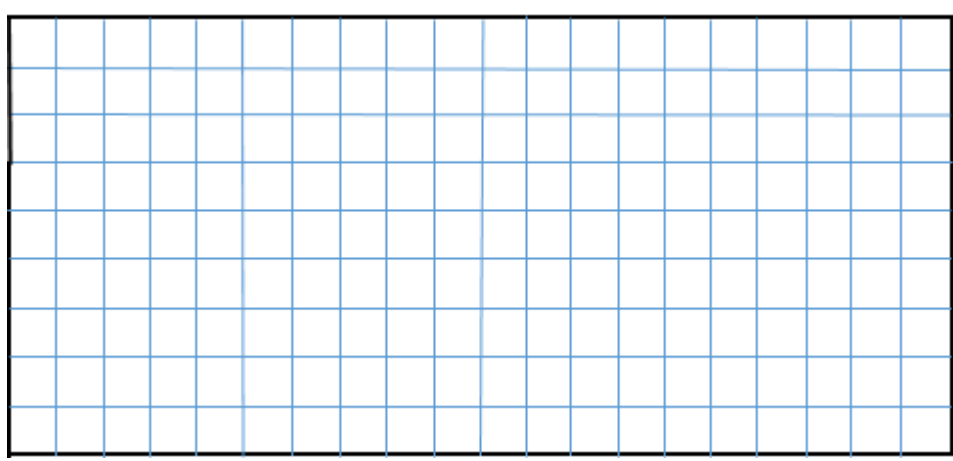


NOT to scale

2 marks

3a

Draw a square that has the perimeter of 28cm



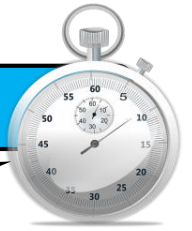
1 mark

3b

What is its area?

cm

1 mark



Day 3

Grammar Questions

Don't forget to start your timer!

1

Tick the sentence that must end with a question mark

The cinema opens at four

Tick **one**

We have two bags of popcorn

Can I have my ticket

We must keep quiet

1 mark

2

Which pair of verbs correctly complete the sentence below?

Dad never _____ us easter eggs, he _____ us sweets last year.

buys / brought

Tick **one**

buy / bought

buys / bought

buy / brought

1 mark

Day 3


Grammar Questions

3

Draw a line to match each prefix to the correct word so that it makes a new word.

One has been done for you

<div data-bbox="338 651 587 754">im</div>	<div data-bbox="1038 651 1465 754">interpret</div>
<div data-bbox="338 864 587 967">mis</div>	<div data-bbox="1043 851 1469 954">possible</div>
<div data-bbox="338 1086 587 1189">un</div>	<div data-bbox="1043 1072 1469 1176">adequate</div>
<div data-bbox="338 1308 587 1411">in</div>	<div data-bbox="1043 1305 1469 1408">doubtable</div>
<div data-bbox="338 1538 587 1641">de</div>	<div data-bbox="1038 1536 1465 1639">construct</div>



How does the Easter bunny stay fit?
Hare-robics!

2 marks

Day 3

Grammar Questions

4

Which sentence has been **punctuated** correctly?

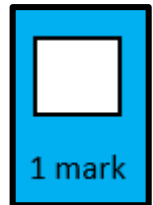
Tick **one**

I need my shorts trainers, and spare socks for PE tomorrow.

I need, my shorts, trainers, and spare socks for PE tomorrow.

I need shorts, trainers, and spare socks for PE tomorrow.

I need shorts, trainers and spare socks for PE tomorrow.



5

Which sentence below is written in **past tense**?

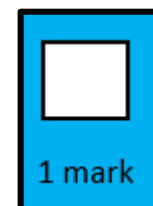
Tick **one**

The car went into the garage.

The car owners are taking the car into the garage.

The garage is in the village.

There is one garage near our home.



Day 3

Grammar Questions



6

Circle one **verb** in each underlined pair to complete the sentences using Standard English.

The boys have/had finished their cereal and was/were eating toast when the post arrived.

2 marks

7

Write the **contracted** form of the underlined words in the box.

The teacher could not find the key to open the door.



1 mark

8

Which sentence uses an apostrophe correctly?

Tick **one**

James put Daniels' bag away.

James put Daniel's bag away.


Jame's put Daniels bag away.

James' put Daniels bag away.

1 mark

Day 3

Grammar Questions



9

What does the pronoun her refer to in the following sentences?

Laura carefully gave Mrs Thompson a small drawing with a flower on. Her artwork had always been excellent.


Tick **one**

Laura

Mrs Thompson

artwork

drawing



Well done!

You've completed your brain workout for day three!

Time taken

min sec



Day 4


Grammar Questions

Don't forget to start your timer!

1

Circle the correct **homophone** for each sentence.

The brave knight/night gallantly road/rode into the town on a great/grate white hoarse/horse.



2

Circle the correct spelling for each of the three words below.

Circle **one** below

excellant

excellent

excelent

Circle **one** below

special

specail


speshal

Circle **one** below

neccessary

necessary

neccesary




Day 4

Grammar Questions

3

There are **two words** spelt incorrectly in the passage below. Circle them.

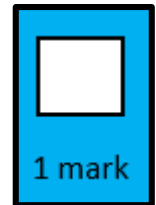
On Saturday, the children visited the zoo. Ned came home with a baloon and Rory bought an elephant mask.



4

Circle the correct spelling to complete the sentence.


After science, we have spelling practise/practice. To be successful in spelling, we must try to practise/practice our words every day.



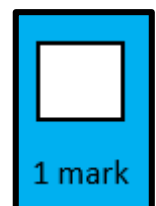
5

Circle the correct spelling to complete the sentence.

The doctor adviced/advised me to take his advice/advise.



How does a rabbit keep his fur looking good?
With hare-spray!




Day 4

Grammar Questions

6

Circle the **three** spelling mistakes.

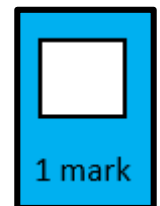
Laila's green, rectangular kite drifted into the air. She wached it untill she could see it no more.



7

Complete the sentence with a **noun** formed from the verb **represent**

Our class council _____ made a speech at the school improvement meeting.



Well done!

You've completed your brain workout for day four!

Time taken

min sec



Day 5

Reasoning Questions

Don't forget to start your timer!

1

Write **one** number in each box

One has been done for you.

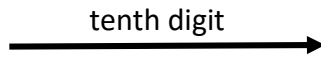
	Multiple of 10	Not a multiple of 10
Multiple of 3	60	
<u>Not</u> a multiple of 3		

□
 2 marks

2

Look at this number. Write the value of the **tenths** digit in the box.

42,961.74



Keep going! You're doing an eggs-cellent job!

□
 1 mark

Day 5

Reasoning Questions

3

Here are six cards. Use a card to complete each calculation.

x 10

x 100

x 1000

÷ 10

÷ 100

÷ 1000

2.1

= 210

2.1

= 0.21

2.1

= 0.021

2 marks

4

Circle all of the **prime** numbers below.

4

7

13

15

16

19

1 mark

Day 5

Reasoning Questions

5

Circle the fraction equivalent to $2\frac{1}{4}$

$$\frac{7}{4}$$

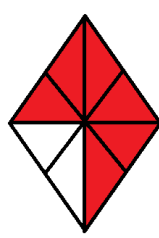
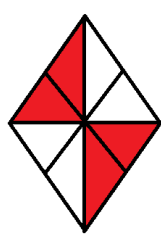
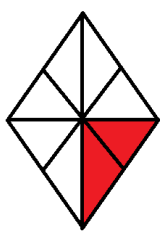
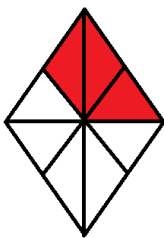
$$\frac{11}{4}$$

$$\frac{9}{4}$$

1 mark

6

Match each shape by drawing a line to the equivalent fraction.




$$\frac{1}{4}$$

$$\frac{1}{2}$$

$$\frac{3}{4}$$

$$\frac{3}{8}$$

2 marks



What day does an egg dislike the most?
Fry-day!

Day 5

Reasoning Questions



7

Write **487** minutes in hours and minutes


hours	minutes
-------	---------

1 mark

Total Score



10



Well done!

You have completed day 5 of your Easter booklet!

Time taken

min	sec
-----	-----



Don't forget to start your timer!

Day 6

Grammar Questions

1

Tick the sentence where the highlighted word is used as a subordinating conjunction.

Tick one

He was at school before you.

She did her homework until dinnertime

Do not undo your seatbelt, until the car has stopped.

When the sun is out, we will go outside.

1 mark

2

Explain how the comma changes the meaning in the two sentences below.

Can you visit Grandpa?

Can you visit, Grandpa?

2 marks

Day 6

Grammar Questions



3

How do the words As carefully as he could function in the sentence below

As carefully as he could, he unwrapped the foil to reveal the chocolate egg.

Tick **one**

as a relative clause

as a noun phrase

as a fronted adverbial

as a conjunction

1 mark

4

Tick one box to identify the **relative clause** in the sentence below.

Amy, who ran the fastest, stood on the tallest podium.

1 mark

Day 6

Grammar Questions



5

Tick one box in each row to show how the **modal verb** affects the **meaning** of the sentence.

Sentence	Modal verb indicates certainty	Modal verb indicates possibility
Dean must be exhausted; he has been working all day.		
Richard could pass his driving test tomorrow.		
Sam might have caught the bus on time.		
Kelly will have fish and chips for dinner tonight.		

2 marks

6

Tick one box in each row if the underlined clause is a **main clause** or a **subordinate clause**.

Sentence	Main clause	Subordinate clause
Sid, <u>who lived down the road</u> , was Ollie's best friend.		
<u>Ollie bought Sid a new football</u> , as he lost his other one.		
<u>Unless Ollie finishes his work</u> , he won't be able to go to the park.		

2 marks

Day 6

Grammar Questions

7

Circle the **two** words in the sentence below that are **synonyms** of each other.

Mo appreciated all of the help Mrs Stone had given him, so he bought her flowers to show his gratitude.

1 mark



Well done!

You have completed day 6 of your Easter booklet!

Time taken

min sec



Don't forget to start your timer!

Day 7

Arithmetic Questions

1 $1,855 \div 7 =$

[Grid area for working out the division]

[Empty rectangular box for the answer]

[Small square box for the mark]

1 mark

2 $9,024 - 3112 =$

[Grid area for working out the subtraction]

[Empty rectangular box for the answer]

[Small square box for the mark]

1 mark

3 $624 + 19 =$

[Grid area for working out the addition]

[Empty rectangular box for the answer]

[Small square box for the mark]

1 mark

Day 7

Arithmetic Questions

7

$62 - 16 \div 2 =$

Grid area for working out the answer.

1 mark

8

90% of £62.70 =

Grid area for working out the answer.

1 mark

Total Score

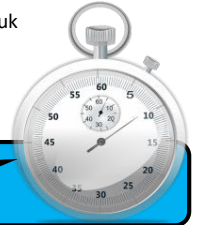


Well done!

You have completed day 7 of your Easter booklet!

Time taken

min sec



Day 8

Grammar Questions

Don't forget to start your timer!

1

Tick the sentence that must end with a question mark

Tick **one**

Which way is the bowling alley

I don't know where it is

Our game will last for two hours

I would like a burger and some chips

1 mark

2

Tick **two** sentences that uses a hyphen.

Tick **two**

There are thirty-five children in our class.

Our class – Sapphire – enjoy swimming.

I'm not a fan of pizza – I prefer pasta.

Great-Aunt Maria is staying with us this weekend.

1 mark

Day 8

Grammar Questions

3

Tick one box to identify where the **comma** should appear in the sentence.

April had tried running cycling and swimming
and still didn't like sport!


1 mark

4

Tick one box to identify where the **comma** should appear in the sentence.

Carefully Zachary placed the egg back into the nest.

1 mark




Why was the easter bunny sad?
Because he was having a bad hare day!

Day 8

Grammar Questions

5

Which punctuation mark should be used in the place indicated by the arrow?

“WOW ” exclaimed Gemma, rubbing her eyes in disbelief.

Tick **one**

A full stop

A comma

An exclamation mark

A question mark

1 mark

6

Insert a **colon** in the correct place in the following sentence.

You will need the following an apron, a bowl and a wooden spoon.



1 mark

Day 8

Grammar Questions

7

Complete the table below by adding a suffix to each noun to make an adjective.

One has been done for you.

Noun	Adjective
success	successful
beauty	
magic	
power	
comfort	

2 marks

8

Re-write the sentence below, adding a subordinate clause.
Remember to punctuate your answer correctly.

The sheep ate the grass.

1 mark

Day 8

Grammar Questions

9

Draw a line to match each word to its correct **antonym**.

One has been done for you

repulsive

present

absent

enemy

adequate


cowardly

brave

insufficient

ally

attractive



What do you get if you pour hot water down a rabbit hole?
Hot cross bunnies!

1 mark

Day 8

Grammar Questions

10

Label the boxes with V (verb), S (subject) and O (object) to show the parts of the sentence.

Thomas kicked the football.

↑
□

↑
□

↑
□

□
1 mark

Total Score
11



Well done!

You have completed day 8 of your Easter booklet!

Time taken

min sec



Day 9

Reasoning Questions

Don't forget to start your timer!

1

Write two missing digits to make this long multiplication correct.

$$\begin{array}{r} 68 \\ \times \square 1 \\ \hline 68 \\ 34\square 0 \\ \hline 3468 \end{array}$$

2 marks

2

Here is a number written in Roman numerals.

CLV

Rewrite this number in the box below in figures.

1 mark

Day 9**Reasoning Questions****3**Round **67, 874**

to the nearest 100

to the nearest 1,000

to the nearest 10,000

 2 marks

Day 9

Reasoning Questions

4

Two kilograms of bronze costs £7.20

What is the cost of 300g of bronze?

Show your method																				

£

2 marks

**You're almost there!
Keep going!**



Day 9

Reasoning Questions

5

On Monday, a school had raised $\frac{3}{4}$ of their fundraising target.
By Friday, they had raised the other £75.

How much did the school raise in total?

Show your method

£

2 marks

Total Score

9



Well done!

You have completed day 9 of your Easter booklet!

Time taken


min sec

Day 10

Arithmetic Questions

4

$14^2 =$




A large grid area for working out the answer to question 4. A rectangular box is provided for the final answer.

1 mark

5

$904,566 - 81,482 =$




A large grid area for working out the answer to question 5. A rectangular box is provided for the final answer.

1 mark

6

$\frac{3}{4} + \frac{1}{5} =$



A large grid area for working out the answer to question 6. A rectangular box is provided for the final answer.

1 mark

Day 10

Arithmetic Questions

7

$$82 - 9 \times 8 =$$

1 mark

8

$$35 \% \text{ of } \pounds 122.80 =$$

1 mark

9

$$\frac{2}{3} \times \frac{2}{5} =$$

1 mark



Well done!

You have completed day 10 of your Easter booklet!

Time taken

min	sec
-----	-----

Congratulations!

You have completed your Easter Booklet!

Happy Easter!

Don't forget to mark your work, if you have been asked and hand your score sheet to your teacher!

WOW! What a star!



You did it!